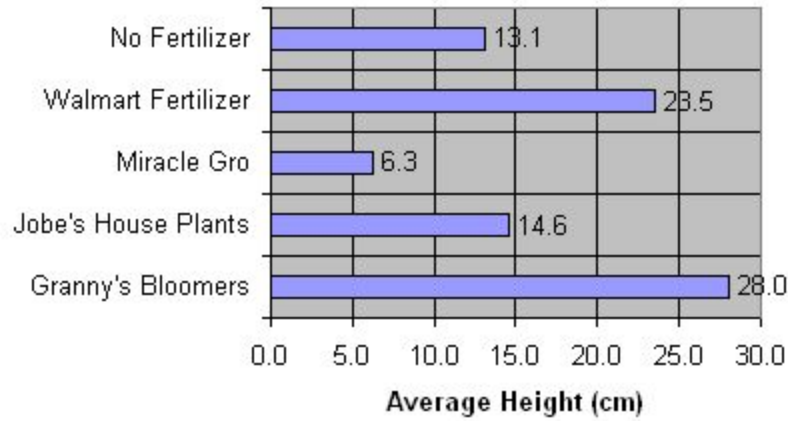


Name: _____

Date: _____ Period: _____

Directions: Please answer each response in complete, well constructed sentences

The Effect of Fertilizers on Bean Plant Growth

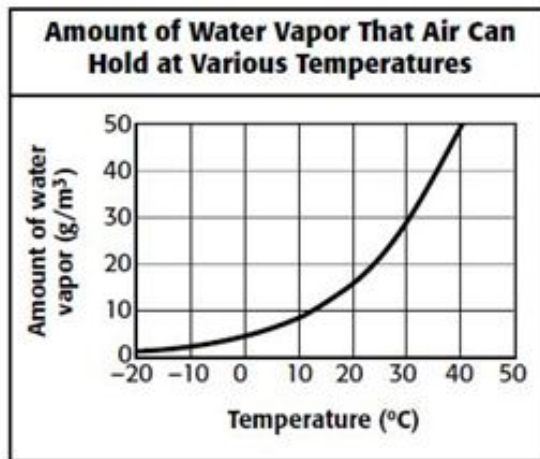


1. What does this graph represent? How do you know?

2. What do you think "average" height means?

3. What type of graph is represented here?

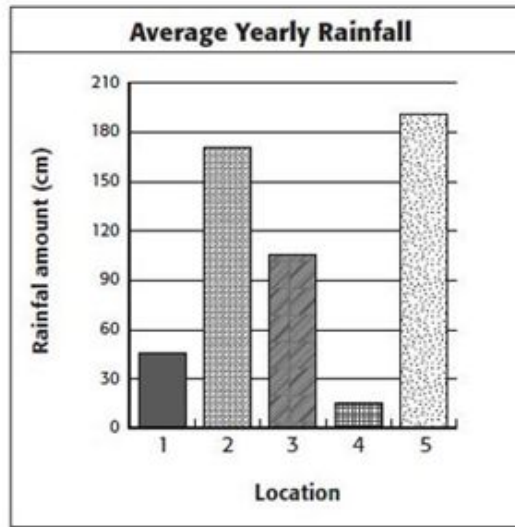
- a. Line graph
- b. Bar graph
- c. Pi chart
- d. Scatter plot



4. What does this graph represent? How do you know?

5. What is labeled on the “x” axis and the “y” axis?

6. What can you interpret from this graph?



7. What does this graph represent? How do you know?

8. Which location has the highest amount of rainfall? How do you know?
